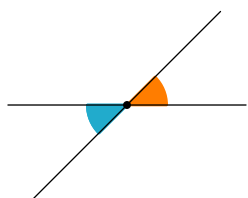
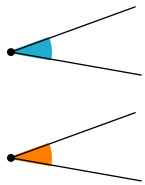


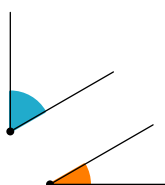
# KAMPUŲ POROS



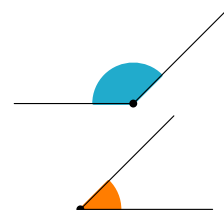
Kryžminiai kampai



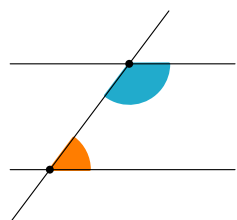
Lygūs kampai



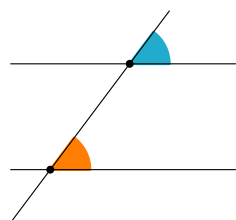
“Du kampai, kurių  
suma lygi  $90^\circ$ ”



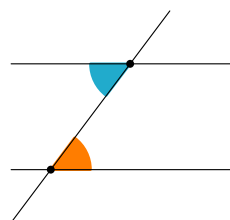
“Du kampai, kurių  
suma lygi  $180^\circ$ ”



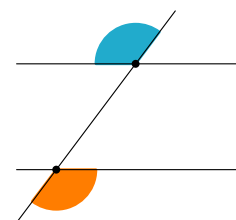
Vienašaliai kampai



Atitinkamieji kampai



Vidaus  
priešiniai kampai



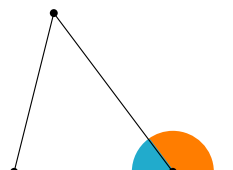
Išorės  
priešiniai kampai



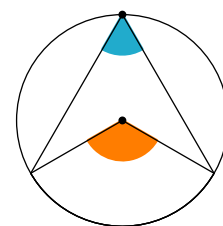
Gretimi kampai



Gretutiniai kampai



Vidaus kampas,  
priekampis



Įbrėžtinis kampas,  
centrinis kampas